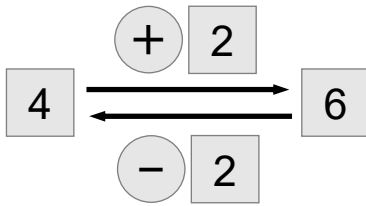




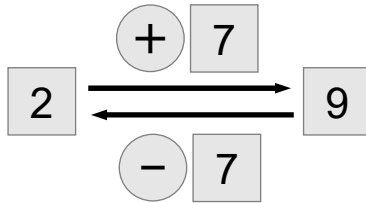
Umkehraufgaben ablesen und zuordnen

1




$4 + 2 = 6$

$6 - 2 = 4$

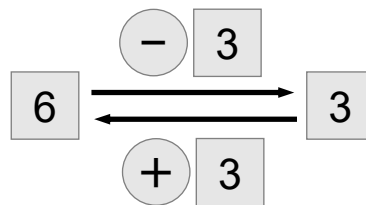


$\square + \square = \square$

$\square - \square = \square$

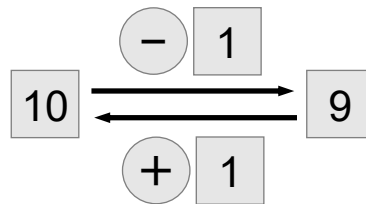


2



$\square - \square = \square$

$\square + \square = \square$



$\square - \square = \square$

$\square + \square = \square$

3

$2 + 3 = 5$

$7 - 6 = \square$

$1 + 6 = \square$

$5 - 3 = \square$

$7 + 2 = \square$

$7 - 5 = \square$

$2 + 5 = \square$

$6 - 1 = \square$

$5 + 1 = \square$

$9 - 2 = \square$