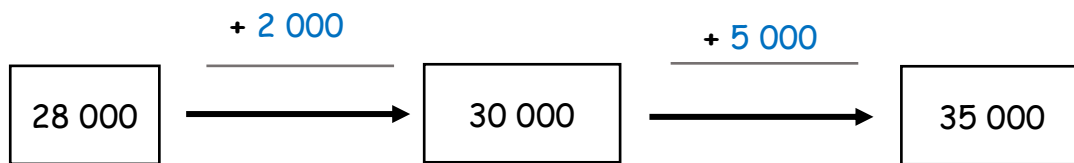




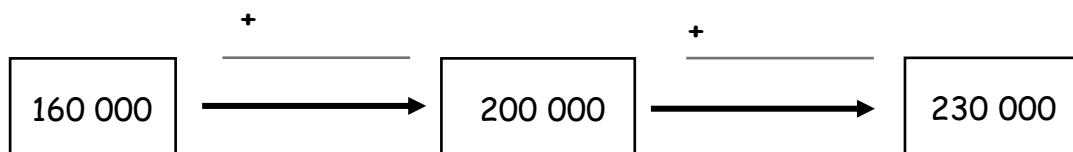
Rechenketten

Trage die fehlenden Zahlen in die Rechenkette ein. Wie hilft die Rechenkette um herauszufinden, welche Zahl in der Aufgabe fehlt?

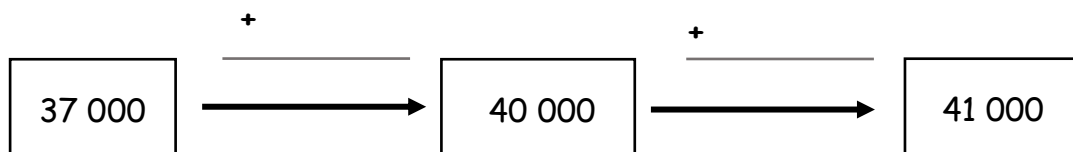
a) $28\ 000 + \underline{7\ 000} = 35\ 000$




b) $160\ 000 + \underline{\quad\quad\quad} = 230\ 000$



c) $37\ 500 + \underline{\quad\quad\quad} = 41\ 000$



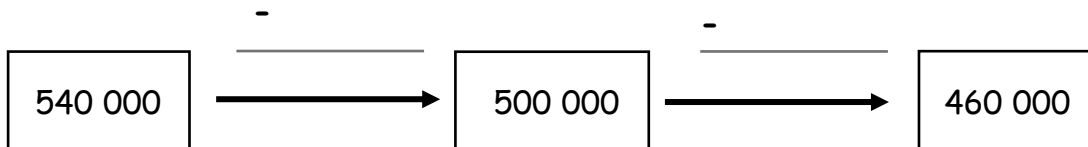
d) $840\ 000 + \underline{\quad\quad\quad} = 930\ 000$



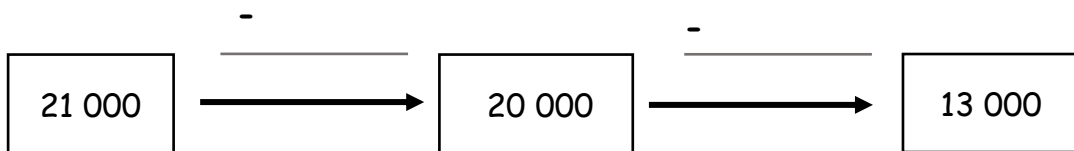


Rechenketten

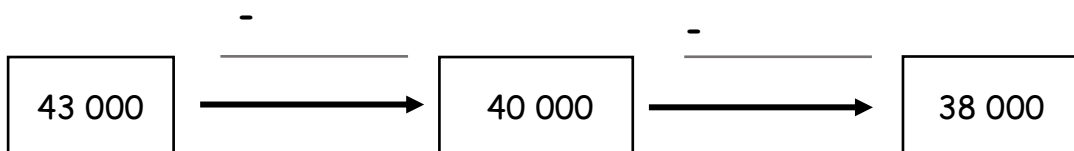
e) $540\ 000 - \underline{\hspace{2cm}} = 460\ 000$



f) $21\ 000 - \underline{\hspace{2cm}} = 13\ 000$



g) $43\ 500 - \underline{\hspace{2cm}} = 38\ 000$



h) $750\ 000 - \underline{\hspace{2cm}} = 680\ 000$

