
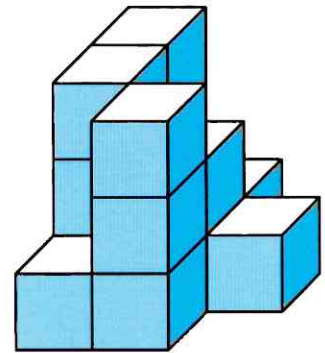
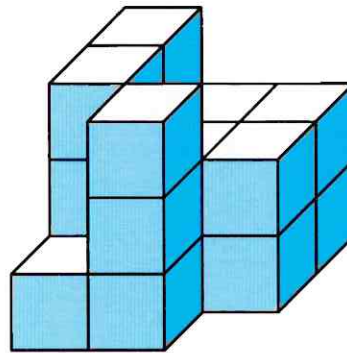
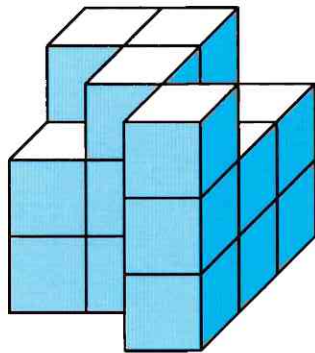
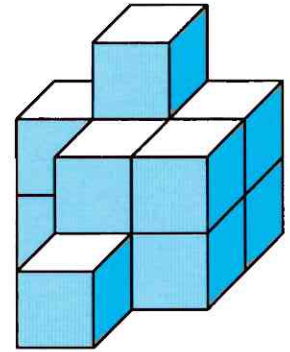
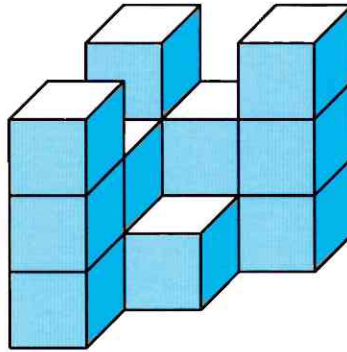
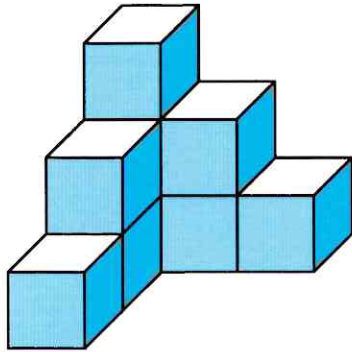


Aufgabe 1



Baue die Würfelgebäude nach.



Aufgabe 2: Baue diese Würfelgebäude.

3	3	
	2	3
1	2	

1	1	1
2	3	2
	1	

3	1	3
2	3	2
3		3

3		
2	3	
	1	3

4	3	
3	3	1
	1	

2	2	
1	4	2
	2	3

2	3	4
1	2	3
	1	2

4	3	4
2	1	2
	3	