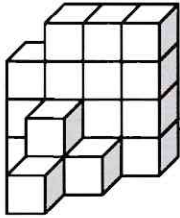


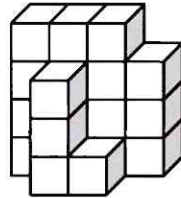
Auf diesem Arbeitsblatt siehst du das Würfelgebäude einmal **von vorne** und dann **von hinten**.

Schreibe den passenden Bauplan dazu!

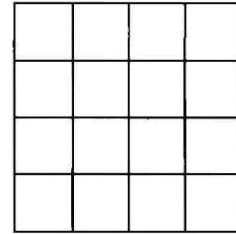
Ansicht von vorne:



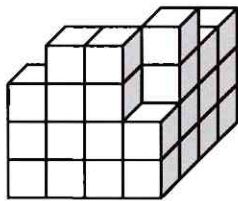
Ansicht von hinten:



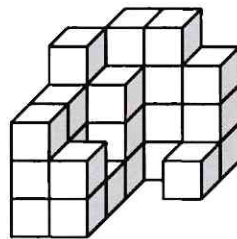
Bauplan



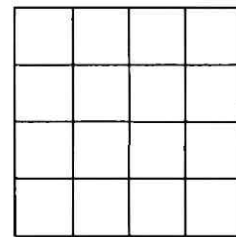
Ansicht von vorne:




Ansicht von hinten:



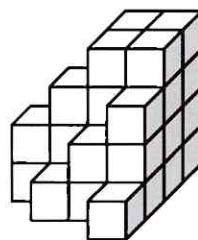
Bauplan




Ansicht von vorne:



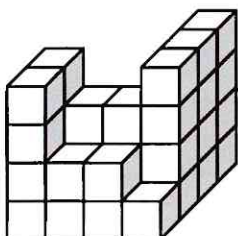
Ansicht von hinten:



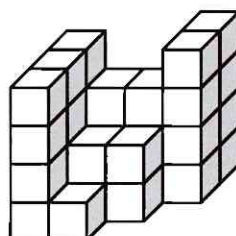
Bauplan



Ansicht von vorne:



Ansicht von hinten:



Bauplan

